

Weights - Challenge

Look at the weights of the different objects and complete the addition underneath.



80g



70g



30g





60g







20g







10g



1.  +  =



2.  +  =

3.  +  =

4.  +  =

5.  +  =

6.  +  =

7.  +  =

8.  +  =